

Discover the Star within you and Get Rewarded

Paper Code: 02

CAREER POINT STAR

Scholastic Test for Analysis and Reward

CLASS - 8th

(Class 8th Studying Students)

Duration: 2:00 hours

Maximum marks: 300

Instructions to Candidates

- CP Star Test paper consists of total 75 questions and has been divided in three sections as follows:

a. Science	25 Questions	Que. No. 01 to 25
b. Maths	25 Questions	Que. No. 26 to 50
c. Mental Ability	25 Questions	Que. No. 51 to 75
- All questions are compulsory.
- All the answers will be encircled in OMR sheet which is being provided along with this paper.
- For every correct answer marked by you, **4** marks will be allotted.
- For every incorrect answer marked by you, **1** marks will be deducted.
- Use of calculator is not permitted in any case.
- Any kind of malpractice will expel you from exam immediately.
- For any confusion please talk to the invigilator in the examination hall.
- For any kind of suggestions or complaints send Email at info@cpil.in



CAREER POINT

CP Tower, Road No.1, IPIA, Kota (Raj)-5 | Tel: 0744-6630500, 3040000
www.careerpoint.ac.in | cpstar.careerpoint.ac.in | info@cpil.in

DO NOT OPEN THE PAPER WITHOUT BEING INSTRUCTED TO DO SO BY THE INVIGILATOR
निरीक्षक के अनुदेशों के बिना पेपर न खोलें

SECTION-a [SCIENCE]

- Q.1** When a batsman applies force to hit the ball with the bat, the moving ball
(1) changes direction.
(2) starts jumping.
(3) does not change direction.
(4) starts rolling.
- Q.2** A charged comb attracts small pieces of paper due to
(1) frictional force.
(2) magnetic force.
(3) gravitational force.
(4) electrostatic force.
- Q.3** If area of contact is increased, then
(1) pressure increases.
(2) pressure decreases.
(3) pressure remains constant.
(4) pressure increases up to some extent then decreases.
- Q.4** Water comes out from the leaking joints of water pipes as the pressure is exerted by water on
(1) all the walls of the pipe.
(2) holes of the pipe.
(3) left wall of the pipe only.
(4) mouth of the pipe.
- Q.5** Frictional force is
(1) contact force.
(2) non-contact force.
(3) muscular force.
(4) force applied by earth.
- Q.6** Friction cannot be reduced by
(1) Polishing
(2) Oiling
(3) By using the ball bearing
(4) If area of contact is less
- Q.7** The frequency of the object making 10 oscillations in 1 second is equal to
(1) 1 Hz. (2) 5 Hz.
(3) 8 Hz. (4) 10 Hz.
- Q.8** The vibrating part of the flute is the
(1) stretched membrane.
(2) stretched string.
(3) air column.
(4) water column.
- Q.9** Metals usually possess
(1) high melting and high boiling points.
(2) high melting and low boiling points.
(3) low melting and high boiling points.
(4) low melting and low boiling points.
- Q.10** The synthetic fibre used to make a parachute is
(1) nylon. (2) polyester.
(3) rayon. (4) acrylic.
- Q.11** Which of the following can undergo a chemical reaction?
(1) $\text{MgSO}_4 + \text{Fe}$ (2) $\text{ZnSO}_4 + \text{Fe}$
(3) $\text{MgSO}_4 + \text{Pb}$ (4) $\text{CuSO}_4 + \text{Fe}$
- Q.12** Plastics are
(1) natural substance.
(2) bio degradable.
(3) non bio-degradable.
(4) very reactive.
- Q.13** The one that has lusture appearance is
(1) chlorine. (2) sulphur.
(3) copper. (4) phosphorus.
- Q.14** The biodegradable material is
(1) thermocol. (2) vegetable peels.
(3) coke tin. (4) aluminium foil.

Space for rough work

- Q.15** A metal that melts at normal human body temperature is
 (1) Lead. (2) gallium.
 (3) potassium. (4) sodium.
- Q.16** Synthetic fibres are made of large units called
 (1) chains. (2) molecules.
 (3) polymers. (4) polygonal.
- Q.17** Areas for the protection of wildlife, their habitats and natural resources are called
 (1) biosphere reserve (2) zoological parks
 (3) ecosphere. (4) ecosystem.
- Q.18** An untrue statement is that
 (1) migratory birds migrate during a particular time of the year.
 (2) migratory birds cover long distances.
 (3) migratory birds migrate to prevent themselves from inhospitable weather.
 (4) migratory birds migrate to the nearest location.
- Q.19** Animals are becoming extinct or facing extinction due to
 (1) disturbances in their habitat.
 (2) free movement of animals.
 (3) wider space availability.
 (4) more food availability.
- Q.20** Nutrients are supplied to plants through
 (1) fertilisers. (2) weedicide.
 (3) insecticide. (4) earthworms.
- Q.21** Preparation of soil is important for the
 (1) roots to penetrate.
 (2) stem to be erect.
 (3) leaves to be greener.
 (4) removal of microbes.

- Q.22** Fallowing of land means
 (1) leaving the land uncultivated.
 (2) cultivation of many crops.
 (3) cultivation of only one crop.
 (4) cultivation of crop in one season.
- Q.23** Sugar acts as a preservative because it
 (1) increases the moisture content.
 (2) reduces the moisture content.
 (3) kills the microorganism.
 (4) increases the life of microorganisms.
- Q.24** Disease causing micro-organisms are called
 (1) vectors. (2) pathogens.
 (3) agents. (4) microbes.
- Q.25** The bread that we have in our breakfast appears soft and fluffy due to the formation of
 (1) carbon monoxide.
 (2) nitrogen.
 (3) carbon dioxide.
 (4) oxygen.

SECTION-b [MATHS]

- Q.26** If $x = \frac{-2}{7}$, then $|-x|$ is equal to :
 (1) $\frac{2}{7}$ (2) $\frac{-2}{7}$ (3) 0 (4) 1
- Q.27** $9\frac{3}{4} + 11\frac{1}{2} + 8\frac{1}{4}$ equals :
 (1) 28.5 (2) 27.5 (3) 30.5 (4) 29.5
- Q.28** The value of $\left[\frac{25}{8} \times \frac{2}{5}\right] - \left[\frac{3}{5} \times \left(-\frac{10}{9}\right)\right]$ is :
 (1) 0 (2) $\frac{23}{12}$ (3) $\frac{15}{12}$ (4) 10

Space for rough work

Q.29 Ben sold his used snow plow and accessories for \$352. If he received seven times as much money for the snow plow as he did for the accessories, find how much money he received for the snow plow :
 (1) \$54 (2) \$308 (3) \$2464 (4) \$44

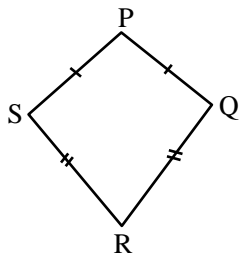
Q.30 The value of x in $y = \frac{kx - a}{x - 1}$ is :
 (1) $\frac{y - a}{k - y}$ (2) $\frac{a - y}{y - k}$ (3) $\frac{a - y}{k - y}$ (4) $\frac{y - a}{y - k}$

Q.31 The sum of three consecutive even numbers is 384, what are the numbers?
 (1) 126, 128, 130 (2) 128, 130, 132
 (3) 128, 129, 130 (4) None of these

Q.32 If an angle of a parallelogram is two-third of its adjacent angle, the smallest angle of the parallelogram is :
 (1) 108° (2) 54°
 (3) 72° (4) 81°

Q.33 ABCD is a rhombus. If $\angle ACB = 50^\circ$, then $\angle ADB$ is :
 (1) 50° (2) 40°
 (3) 30° (4) 60°

Q.34 PQRS is a kite $\angle P = 70^\circ$, $\angle S = 90.5^\circ$ then $\angle R$ is :



(1) 109° (2) 115°
 (3) 71° (4) 90°

Q.35 In quadrilateral ABCD, $AB \parallel DC$, $AB = 7$ cm, $BC = 6$ cm, $AD = 6.5$ cm and $\angle B = 70^\circ$, then which figure can be constructed ?
 (1) Square (2) Trapezium
 (3) Rhombus (4) Rectangle

Q.36 **Statement I** : To construct a quadrilateral we need to satisfy triangle inequality only.
Statement II : A rectangle can be constructed if it's one side and one diagonal is given.
 (1) Both statements I and II are correct
 (2) Both statements I and II are incorrect
 (3) Statement I is correct and statement II is incorrect
 (4) Statement I is incorrect and statement II is correct

Q.37 Data collected in a survey shows that 40% of the buyers are interested in buying a particular brand of toothpaste. The central angle of sector of the pie chart representing this information is :
 (1) 120° (2) 155° (3) 144° (4) 40°

Q.38 A bar graph is drawn to the scale 1 cm = k units, then a bar of length k cm represents :
 (1) 1 unit (2) k units
 (3) 2k units (4) k^2 units

Q.39 A number is picked from a set of 100 natural numbers starting from 1. The probability of getting a prime number is :
 (1) $\frac{3}{20}$ (2) $\frac{1}{4}$ (3) $\frac{1}{10}$ (4) $\frac{27}{100}$

Q.40 If a square number ends in 9, then its preceding number is always :
 (1) A multiple of 6
 (2) A prime number
 (3) An odd number
 (4) A multiple of 4

Space for rough work

Q.41 The greatest 3 digit number which is a Perfect square is :
 (1) 729 (2) 927 (3) 961 (4) 972

Q.42 $\left(\sqrt{\frac{225}{729}} - \sqrt{\frac{25}{144}}\right) \div \sqrt{\frac{16}{81}}$ equals :
 (1) $\frac{1}{48}$ (2) $\frac{5}{81}$
 (3) $\frac{5}{16}$ (4) None of these

Q.43 If 9, (x + 20), (x + 21) is a Pythagorean triplet, then value of x is :
 (1) 20 (2) 30 (3) 35 (4) 40

Q.44 Three numbers are in the ratio 2 : 3 : 4. The sum of their cubes is 33957. The numbers are :
 (1) 14, 21, 28 (2) 12, 18, 24
 (3) 8, 12, 16 (4) 21, 28, 32

Q.45 The value of $\frac{(2.3)^3 - 0.027}{(2.3)^3 + 0.69 + 0.09}$ is :
 (1) 2 (2) 2.273
 (3) 2.327 (4) None of these

Q.46 The cube root of 0.000512 is :
 (1) 0.5 (2) 0.08
 (3) 0.008 (4) 8

Q.47 At what percentage above the C.P. must an article be marked so as to gain 25 % after allowing the customer a discount of 20 % ?
 (1) 45 % (2) $54\frac{1}{2}$ %
 (3) 55 % (4) $56\frac{1}{4}$ %

Q.48 A sum of money amounts to Rs. 8225 in $3\frac{1}{2}$ years and to Rs. 8750 in 5 years at a certain rate of S.I. The sum and the rate respectively are :
 (1) 7000, 5 % (2) 7000, 7 %
 (3) 8000, 5 % (4) 8000, 7 %

Q.49 Rs. 62500 was lent at 8 %, 9 %, 10 % p.a. for the first, second, and third year respectively at C.I. The total C.I. acquired will be Rs. :
 (1) 16432.50 (2) 18234.50
 (3) 18432.50 (4) 17342.50

Q.50 Find the C.I. on Rs. 10000 for $1\frac{1}{2}$ years at 5 % p.a., interest being compounded yearly :
 (1) Rs. 800.50 (2) Rs. 825.50
 (3) Rs. 750.50 (4) Rs. 762.50

SECTION-C [MENTAL ABILITY]

Q.51 Find out the missing terms each marked with (?) in the series given below.
 B, C, ?, H, L, ?, W
 (1) E, Q (2) D, N
 (3) E, M (4) D, Q

Q.52 Find out the missing letters in alphabetical series given below.
 b _ ab _ a _ ca _ c _ bc _
 (1) abcabc (2) abbcca
 (3) ccbbaa (4) aabbcc

Q.53 As 'Magazine' is related to 'Editor' in the same way 'Drama' is related to what?
 (1) Hero (2) Heroine
 (3) Co-actor (4) None of these

Space for rough work

- Q.54** As 'Cricket' is related to 'Bat' in the same way, 'Tennis' is related to what?
 (1) Game (2) Stick
 (3) Court (4) None of these

- Q.55** Choose the wrong term in the following number series.
 169, 144, 120, 100, 81
 (1) 81 (2) 100
 (3) 120 (4) 144

Direction (Q.56 to 58)

In each of the following problems, four groups of numbers are given of which three are alike in some way, while the rest one is different. Choose out the different one.

- Q.56** (1) 177 (2) 263 (3) 134 (4) 482

- Q.57** (1) 7, 49, 343 (2) 4, 16, 32
 (3) 3, 9, 27 (4) 5, 25, 125

- Q.58** (1) 7 : 51 (2) 6 : 37 (3) 5 : 26 (4) 8 : 65

Directions : (Q.59) Find the missing term :

- Q.59** If a = 10 (110) 12 and b = 15 (185) 13 then what will come in place of '?'.
 c = ? (158) 14
 (1) 15 (2) 20
 (3) 12 (4) 8

- Q.60** SCHOOL = PNIKKB and ME = ZY, how will you write COOL HOME ?
 (1) N K K B I K Z Y
 (2) N K K L I K Z Y
 (3) P K K N I K Y Z
 (4) N K K B P K Z Y

- Q.61** If AROMA = 24, GRAND = 22, KWALITY = ?
 (1) 40 (2) 62
 (3) 55.5 (4) 50.5

Directions : (Q.62 to Q.64) The capital letters in each of the following words are coded as figures on the right side. Find out the codes for letters and answers the questions

STRONG : $\bigcirc + \div \triangle \bullet |$
 WET : $\% \bigcirc +$
 STRING : $\bigcirc + \div \blacktriangle \bullet |$
 DENSE : $\square \bigcirc \bullet \bigcirc \bigcirc$
 BELONG : $\bullet \bigcirc \times \triangle \bullet |$

- Q.62** Which is the code for 'STOLEN' ?
 (1) $\bigcirc \times \bigcirc \times \bullet \%$
 (2) $\bigcirc + \div \times \bigcirc \bullet$
 (3) $+ \bigcirc \blacktriangle \div \times \bigcirc$
 (4) $\bigcirc + \triangle \times \bigcirc \bullet$

- Q.63** Which is the code for 'LOWER' ?
 (1) $\times \bullet \% \triangle \div$
 (2) $\times \triangle \% \bigcirc \div$
 (3) $\triangle + \% \triangle \div$
 (4) $\times \bullet \% \triangle \div$

- Q.64** Which is the code for 'DRESSING' ?
 (1) $\square \div \bigcirc \bigcirc \blacktriangle \bullet |$
 (2) $\times \div \bigcirc \blacktriangle \bullet | +$
 (3) $\div \square \bigcirc \bigcirc \blacktriangle \bullet +$
 (4) $\square \% \bigcirc \bigcirc \triangle \bullet |$

Space for rough work

- Q.65** If \div means $+$, $-$ means \div , \times means $-$ and $+$ means \times , then

$$\frac{(36 \times 4) - 8 \times 4}{4 + 8 \times 2 + 16 \div 1} = ?$$

 (1) 0 (2) 8 (3) 12 (4) 16

- Q.66** If x stands for 'add', y stands for 'subtract', z stands for 'divide' and p stands for 'multiply', then what is the value of $(7 \text{ p } 3) \text{ y } 6 \times 5 = ?$
 (1) 5 (2) 10 (3) 15 (4) 20

- Q.67** If L denotes \times , M denotes \div , P denotes $+$ and Q denotes $-$, then
 $16 \text{ P } 24 \text{ M } 8 \text{ Q } 6 \text{ M } 2 \text{ L } 3 = ?$
 (1) $\frac{13}{6}$ (2) $-\frac{1}{6}$ (3) $14\frac{1}{2}$ (4) 10

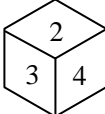
Directions : (Q.68) Solve the questions if the symbols are as given below :
 $x = -, + = \div, \div = \times, - = +$

- Q.68** $8 \div 2 + 2 - 7 = ?$
 (1) 15 (2) 16
 (3) 17 (4) 19
- Q.69** Which one of the four interchanges in signs and numbers would make the given equation correct?
 $3 + 5 - 2 = 0$
 (1) $+$ and $-$, 2 and 3 (2) $+$ and $-$, 2 and 5
 (3) $+$ and $-$, 3 and 5 (4) None of these
- Q.70** Find out to sign to be interchanged for making the question correct
 $10 + 10 \div 10 - 10 \times 10 = 10$
 (1) $+$ and $-$ (2) $+$ and \times
 (3) \div and \times (4) $+$ and \div

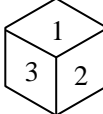
Direction : (Q.71 & Q.72) If $>$ denotes $+$, $<$ denotes $-$, $+$ denotes \div , \wedge denotes \times , $-$ denotes $=$, \times denotes $>$ and $=$ denotes $<$, choose the correct statements in each of the following questions.

- Q.71** (1) $14 > 18 + 9 = 16 + 4 < 1$
 (2) $4 > 3 \wedge 8 < 1 - 6 + 2 > 24$
 (3) $3 < 6 \wedge 4 > 25 = 8 + 4 < 1$
 (4) $12 > 9 + 3 < 6 \times 25 + 5 > 6$
- Q.72** (1) $29 < 18 + 6 = 36 + 6 \wedge 4$
 (2) $18 > 12 + 4 \times 7 > 8 \wedge 2$
 (3) $32 > 6 + 2 = 6 < 7 \wedge 2$
 (4) $31 > 1 < 2 = 4 > 6 \wedge 7$

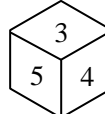
Directions : (Q.73 to Q.74) In the following questions, choose the words that show the same relationship as given in the each questions

- Q.73** 'Goitre' is related to 'Iodine' as 'Anaemia' is related to :
 (1) Vitamin (2) Blood
 (3) Iron (4) Weakness
- Q.74** 'Page' is related to 'Book' as 'Leaf' is related to-
 (1) Root (2) Green
 (3) Tree (4) Forest
- Q.75** A die is thrown four times and its four different positions are given below. Find the number on the face opposite the face showing 2.
- 

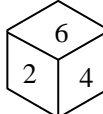
(i)



(ii)



(iii)



(iv)
- (1) 3 (2) 4 (3) 5 (4) 6

Space for rough work

CAREER POINT

WHERE CARE LEADS TO CAREER

UNIVERSE OF EDUCATION ~ Pre-School to Ph.D

Tutorial Services
6th to 12th / 12th pass



CAREER POINT
Pre-Engineering, Pre-Medical & Pre-Foundation



School Integrated
Coaching Program

Distance Learning
Programme

e-Learning Solutions
7th to 12th / 12th pass



VIDEO LECTURES
(on Pen Drive | SD Card)

eCareerPoint
Empowering Minds!



StudyBoard

School Education
Pre-School to 12th



GLOBAL KIDS

GLOBAL
PUBLIC SCHOOL

CAREER POINT
WORLD SCHOOL
JODHPUR | BILASPUR

CAREER POINT
gurukul
KOTA | MOHALI | RAISAMAND

Higher Education
10th to Ph.D



CAREER POINT
UNIVERSITY
—KOTA | HAMIRPUR—

C·P·I·S·D

Career Point
Institute of
Skill Development

Trust of more than **3.82 Lakhs** Students & Parents since inception

12,100+ IITians | 1,40,000+ Engineers | 12,500+ Doctors

BRANCHES & STUDY CENTRES

Alwar	: 0144-2700785, 96729-77516	Lucknow	: 81770-00200, 81770-00300
Baran	: 96729-77167	Mahendragarh	: 90791-34735
Bhagalpur	: 95230-98131, 95230-98130	Malkapur	: 96729-77583
Bhubaneswar	: 93374-49749, 82601-03344	Modasa	: 70690-36134 / 35 / 37 / 38
Bilaspur	: 70247-10777, 99811-66082	Mysuru	: 91089-99777, 97397-11792
Bundi	: 90791-34701, 90791-34688	Narayangaon	: 90791-34702
Delhi	: 89208-74769, 011-40392491	Patiala	: 91155-05566, 91155-05577
Guwahati	: 93654-80875, 98640-38227	Patna	: 96729-77237
Gwalior	: 74404-40940, 74404-40941	Pilani	: 96729-77414
Himatnagar	: 70690-36130 / 31 / 32 / 33	Rajahmundry	: 91772-12299, 91775-92299
Jaipur	: 0141-2762774, 96729-77508	Rourkela	: 0661-2471412, 93374-49749
Jammu	: 94192-22022	Shahjahanpur	: 83180-10464
Jamnagar	: 0288-2661441, 98250-74410	Siliguri	: 96729-70387
Jodhpur	: 0291-2616192, 96729-77509	Sriharikota	: 96729-77030
Kishangarh	: 96729-70615	Srinagar	: 0194-2415059, 94193-18549
Kolkata	: 82402-84809, 96744-54809	Trivandrum	: 83300-12600, 94473-24764
Kollam	: 0474-2747642, 83300-12601	Visakhapatnam	: 91772-42299, 91776-12299
Korba	: 96729-44767		

CENTRE NAME



CAREER POINT

KOTA (Head Office): Career Point Ltd, CP Tower, Road No.1, IPIA Kota-5 (Raj.)
For details SMS: Type CP STAR to 56767 | Call: 0744-6630500, 3040000 | info@cpil.in

www.careerpoint.ac.in | www.cpstar.careerpoint.ac.in | dlp.careerpoint.ac.in
<https://books.cppublication.com> | www.ecareerpoint.com